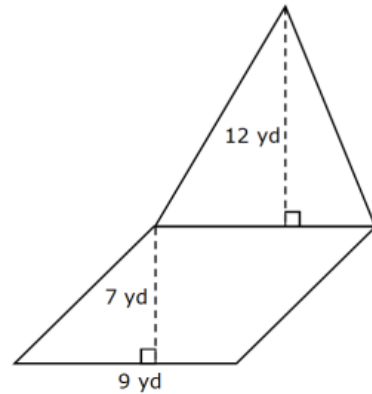


Name: _____ Period: _____

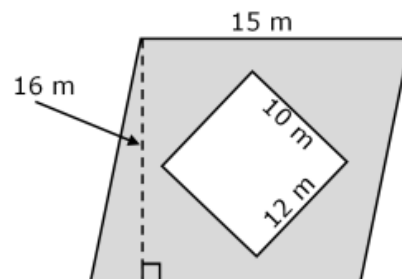
Composite Figures Practice

1. Write out the steps for finding the area of the shape below.



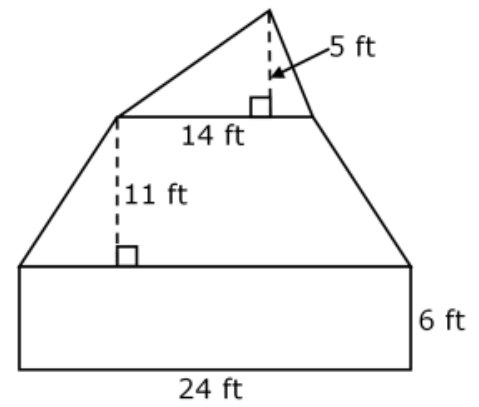
2. Find the area of the shape.

3. Write out the steps for finding the area of the shaded region.



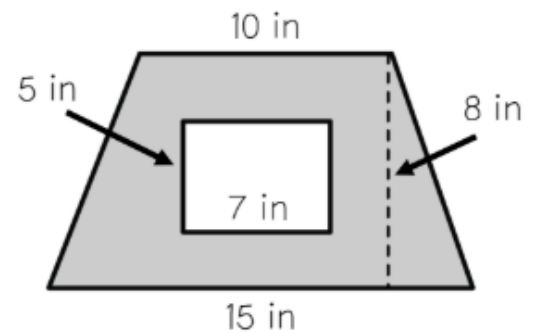
4. Find the area of the shaded region.

5. Write out the steps for finding the area of the figure.



6. Find the area of the figure.

7. Write out the steps for finding the area of the shaded region of the figure.



8. Find the area of the shaded region of the figure.